


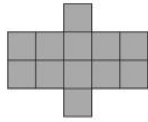
Year 5 Home Booklet 1

Monday

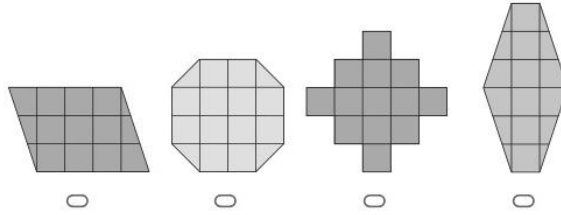
Spelling	<p>Write your spelling words in your book and discuss the meaning of the words with someone.</p> <p>The digraph /ea/ making the sound 'e' as in beach</p> <table border="1"><thead><tr><th>Red</th><th>Orange</th><th>Green</th></tr></thead><tbody><tr><td>weak</td><td>creamy</td><td>cheaply</td></tr><tr><td>lead</td><td>weakest</td><td>disease</td></tr><tr><td>neat</td><td>creature</td><td>realise</td></tr><tr><td>season</td><td>teacher</td><td>decrease</td></tr><tr><td>east</td><td>breathe</td><td>demeaning</td></tr><tr><td>speak</td><td>repeat</td><td>reasonable</td></tr><tr><td>please</td><td>screaming</td><td>meaningful</td></tr><tr><td>defeat</td><td>increase</td><td>cheerleader</td></tr></tbody></table>	Red	Orange	Green	weak	creamy	cheaply	lead	weakest	disease	neat	creature	realise	season	teacher	decrease	east	breathe	demeaning	speak	repeat	reasonable	please	screaming	meaningful	defeat	increase	cheerleader
Red	Orange	Green																										
weak	creamy	cheaply																										
lead	weakest	disease																										
neat	creature	realise																										
season	teacher	decrease																										
east	breathe	demeaning																										
speak	repeat	reasonable																										
please	screaming	meaningful																										
defeat	increase	cheerleader																										
Writing	<p>Write a sizzling start based on the following picture.</p> 																											
Reading	Read for at least 20 mins a book of your choice																											
Comprehension	Choose a book you have read and write a summary of what happens in that book. Include; main characters, setting and what happens.																											
Maths TOWN	Roll dice 3 times (cards) and do six 3 digit + 3 digit additions.																											

Problem Solving

31 Mim drew this shape on some grid paper.



Select the **two** shapes with the same area as Mim's shape.



9 Alan and Travis found 17 gumnuts in total.

Travis found 9 of the gumnuts.

Alan found the rest of the gumnuts.

How many gumnuts did Alan find?

Other

Choose 1 of the following

Make 3 different designs of a paper aeroplane and see which one flies the straightest and furthest. State why you think this occurred.

OR

Do some weeding for 20 mins in the garden

Weekly History Project

STAGE 3 HISTORY: GOVERNMENT (Library)

Australia has decided to change our flag to be more inclusive of Indigenous people.

TASK 1: Design a new Australian flag

Annotate your flag explaining what you have included and why.




Task 2:



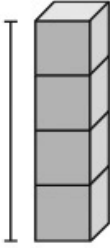
Choose **one** of the following situations and write a diary entry.

1. You are an Aboriginal person watching the first fleet unload their belongings at Port Jackson in 1788. Write a diary entry detailing what you see, what you hear and how you feel.
2. You are writing a letter to the editor of the local paper in 1898 detailing your opinion on Federation. Are you for it or against it? Why? You must include 3-5 supportive arguments in your letter.

Tuesday

Spelling	Write 3-5 spelling words in a sentence in your book.
Writing	Write a Show Don't Tell (descriptive paragraph) about a snake you might find in the garden. 
Reading	Read for at least 20 mins a book of your choice
Comprehension	Write 3 questions you would ask the author about the book you summarised yesterday
Maths TOWN	Roll dice 3 times (cards) and do six 3 digit + 3 digit additions.
Problem Solving	<p>5 In a soccer competition a team won 8 games and lost the other games. Altogether they played 14 games. Finish the subtraction sentence below to show the number of games the team lost.</p> <p><input type="text"/> - 8 = <input type="text"/></p> <p>34 Ann and Pat each have a bucket of fish to feed to the seals. Ann has 8 fish in her bucket. Pat has 22 fish in his bucket. How many fish must Pat give to Ann so that they both have the same number of fish?</p> <p><input type="text"/></p>
Other	Do some cooking with an adult OR Fold a basket of clothes

Wednesday

Spelling	Break your spelling words into syllables.
Writing	Can you persuade Mr Hughes to buy each student an Ipad. Write a persuasive text to him tell the reasons why. 
Reading	Read for at least 20 mins a book of your choice
Comprehension	Draw a picture of the scene you enjoyed the most (visualise) from the book
Maths TOWN	Roll dice 3 times (cards) and do six 3 digit - 3 digit subtractions.
Problem Solving	<p>42 During the week, a bakery sells pies for \$42.00 a dozen. On Sunday, the cost of the pies is discounted by 25%. How much will a dozen pies cost on Sunday?</p> <p>\$ <input type="text"/></p> <p>7 Kim notices that two small cubes are the same height as one large cube.</p>  <p>She then builds this tower with the large cubes.</p>  <p>How many small cubes high is the tower?</p> <p>4 5 8 10</p> <p><input type="radio"/> <input type="radio"/> <input type="radio"/> <input type="radio"/></p>
Other	Make an acrostic poem for the word HEALTH OR make a song/rap about HEALTH

Thursday

Spelling	Create a find a word a find a word in your book. Use a 10cm by 10cm grid.
Writing	Continue persuasive writing from Wednesday
Reading	Read for at least 20 mins a book of your choice
Comprehension	Write an alternate ending for the book previously read.
Maths TOWN	Roll dice 3 times (cards) and do six 3 digit - 3 digit subtractions.
Problem Solving	<p>16 There are 42 chairs in the school hall. Mrs Brown arranges all of the chairs so there are 6 chairs in each row. How many rows are there?</p> <p><input type="text"/></p> <p>38 Cara has 72 water bottles to hand out at a drink stop in a bike race. She puts equal numbers of bottles onto each table at the drink stop and has none left over. Select all of the options that could show the number of tables at the drink stop.</p> <p>7 9 12 15 24</p> <p><input type="radio"/> <input type="radio"/> <input type="radio"/> <input type="radio"/> <input type="radio"/></p>
Other	Listen to some music and relax OR Create an artwork of a calm peaceful subject

Friday

Spelling	Get someone to test you on your spelling words, or do a look cover write check with them.												
Reading	Read for at least 20 mins a book of your choice												
Maths TOWN	Times Tables - write out your 7, 8, 9 and 12 times tables												
Problem Solving	<p>30 Alan lists the art supplies needed for a project. He rounds each price to the nearest dollar to estimate the total cost of the supplies. How much is Alan's estimate?</p> <p>\$ <input type="text"/></p> <table border="1"><thead><tr><th colspan="2">Art supplies</th></tr></thead><tbody><tr><td>paper</td><td>\$3.95</td></tr><tr><td>glue</td><td>\$1.65</td></tr><tr><td>glitter</td><td>\$2.20</td></tr><tr><td>buttons</td><td>\$4.55</td></tr><tr><td>stickers</td><td>\$3.80</td></tr></tbody></table>	Art supplies		paper	\$3.95	glue	\$1.65	glitter	\$2.20	buttons	\$4.55	stickers	\$3.80
Art supplies													
paper	\$3.95												
glue	\$1.65												
glitter	\$2.20												
buttons	\$4.55												
stickers	\$3.80												
	<p>39 Janine is writing a list of numbers that follows these rules:</p> <div style="border: 1px solid black; padding: 5px; width: fit-content; margin: 10px auto;"><p>The number must</p><ul style="list-style-type: none">• be even• lie between 6200 and 7400• have digits that add to 13</div> <p>Select all of the numbers Janine can add to her list.</p> <p>7042 6302 7402 7123 7312 6142</p> <p><input type="radio"/> <input type="radio"/> <input type="radio"/> <input type="radio"/> <input type="radio"/> <input type="radio"/></p>												
Other	Go outside and kick or bounce a ball, jump on the trampoline, run round the back yard OR take the dog for a walk Build a 3D object made out of recyclable materials												

Websites

StudyLadder - free sign up - all subjects

Prodigy - free sign up - maths

BBC KS2 Bitesize - Literacy and maths

Khan Academy