



Year 4 Home Booklet 10

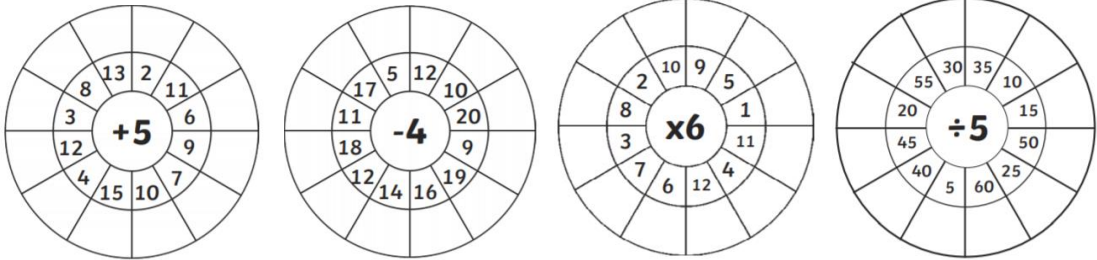


Monday

<p>Spelling</p>	<p>Discuss the meaning of each of your spelling words with someone then write your words out <i>three times</i>.</p> <div style="border: 1px solid black; padding: 5px; margin: 10px auto; width: fit-content;"> <p style="text-align: center;"><i>The digraph /ui/ making the sound "oo" as in fruit. The digraph /ew/ making the sound "oo" as in screw.</i></p> </div> <table border="1" style="width: 100%; border-collapse: collapse;"> <tr> <td style="width: 25%; padding: 5px;"> <p>Rainbow The graph /i/ making the sound "i" as in tin. tin until kin tinned win</p> </td> <td style="width: 25%; padding: 5px;"> <p>Red fruit juice suit screw grew</p> </td> <td style="width: 25%; padding: 5px;"> <p>Orange recruit cruise bruise outgrew threw</p> </td> <td style="width: 25%; padding: 5px;"> <p>Green spruik suitable preview cashew strewth</p> </td> </tr> </table>	<p>Rainbow The graph /i/ making the sound "i" as in tin. tin until kin tinned win</p>	<p>Red fruit juice suit screw grew</p>	<p>Orange recruit cruise bruise outgrew threw</p>	<p>Green spruik suitable preview cashew strewth</p>
<p>Rainbow The graph /i/ making the sound "i" as in tin. tin until kin tinned win</p>	<p>Red fruit juice suit screw grew</p>	<p>Orange recruit cruise bruise outgrew threw</p>	<p>Green spruik suitable preview cashew strewth</p>		
<p>Writing</p>	<p>Persuasive Writing or Speech - Monday and Tuesday</p> <p>Is learning better at school or is learning better at home?</p> <p>You can either write your argument or prepare a speech and post it on Seesaw. Your choice!</p> <p>Remember to plan and edit your writing.</p> 				
<p>Reading</p>	<p>Read for 20 minutes.</p>				
<p>Sentence of the Day</p>	<p>A complex sentence has an independent clause joined by one or more dependent clauses. A complex sentence always has a subordinator such as <i>because, since, after, although, or when</i> or a relative pronoun such as <i>that, who, or which</i>. For example: I caught the ball <u>that</u> you threw. Finish this:</p> <ul style="list-style-type: none"> • I saw the sun after 				
<p>Comprehension</p>	<p>Talking and Listening Choose a book you have at home or listen to one on YouTube. Write or tell a family member a summary of the book. A summary is when you explain what happens in a story to someone else. You should include the characters, setting, main idea, the problem and how it ends.</p>				



Maths	
Maths Problem Solving	<p>Macy uses $\frac{1}{4}$ of a tube of glue for each birthday card she makes. What is the greatest number of birthday cards she can make with 2 tubes of glue?</p>
Maths:	<p>2D Shapes Using the grid paper, design your own home learning space. Be as creative or crazy as you like.</p>
Other	<p>Make an acrostic poem using a word of your choice. OR make a song/rap on a topic of your choice.</p>
Fun Activity	<p>Complete the Olympic Sports Find-a-Word.</p>

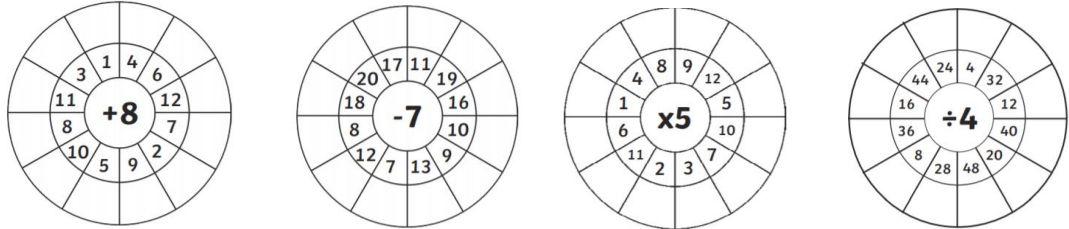


Tuesday

Spelling	<p>Write your spelling words and record the syllables and sounds in each of your words.</p>
Writing	<p>Persuasive Writing or Speech - Monday and Tuesday</p> <p>Is learning better at school or is learning better at home?</p> <p>You can either write your argument or prepare a speech and post it on Seesaw. Your choice!</p> <p>Remember to plan and edit your writing.</p> 
Reading	<p>Read for 20 minutes</p>
Sentence of the Day.	<p>Complete the complex sentence</p> <ul style="list-style-type: none"> Lisa had not seen her sister since....
Comprehension	<p>Using the book you read today or the book you wrote or told a summary for yesterday, visualise your favourite part of the book and draw a picture of it.</p>

Fast Maths	
Maths Problem Solving Question	<p>Blake uses balance scales to compare the weights of rocks A, B and C.</p>  <p>Which of these is true?</p> <ul style="list-style-type: none"> <input type="radio"/> Rock A is lighter than rock C. <input type="radio"/> Rock B is lighter than rock A. <input type="radio"/> Rock B is heavier than rock C. <input type="radio"/> Rock C is heavier than rock B.
Maths:	<p>Gold Medal Olympic Swimming Times</p> <p>Emma McKeon won the 100m freestyle in 51.96 seconds. How many jumps can you do in this time?</p> <p>Izaak Stubblety-Cook won the 200m breaststroke in 2.06.36 minutes. How many star jumps can you do in this time?</p> <p>Ariarne Titmus won the 200m freestyle in 1.51.38 minutes. How knee times can you touch your toes in the same time?</p> <p>Kaylee McKeown won the 100m backstroke in 57.47 seconds. How many burpees can you do in this time?</p> <p>Womens 4x100m Medley Relay Team won in 3.51.60 minutes. Choose a physical activity and do it for the same time.</p> <p>Record your answers. If you like, record your activity and post it on Seesaw.</p>
Other	 <p>Draw different size circles that overlap. Hint: Use cups, containers or bottles for different size circles. Colour the overlapping circles a different colour. You can complete some each day.</p> <p>Or</p> <p>Play a game outside or go for a walk/ bike ride with an adult.</p>

Wednesday

Spelling	Write all of your words in alphabetical order .
Writing	<p>What's in the Box? Using your 5+1 senses describe what's in the box.</p>   <p>Don't tell us. See if your teacher can guess what's in the box!</p>

Reading	Read for 20 minutes.
Sentence of the Day	Complete the complex sentence <ul style="list-style-type: none"> I am a good runner because...
Comprehension	Complete the first Book Emojis (attached at the back of the booklet)
Maths	
Maths Problem Solving	What number is one more than <i>seven thousand and ninety-nine</i> ? <input type="text"/>
Maths:	3D Shapes Using recycled items in your house, build something using those items. You may make a house, robot, car or whatever you like. Be creative! Send a picture to your teacher and identify the 3D shapes you have used. 
Fun Activity	Complete the Rosemeadow Public School Find-a-Word.
Other	 Draw different size circles that overlap. Hint: Use cups, containers or bottles for different size circles. Colour the overlapping circles a different colour. You can complete some each day. Or Play a game outside or go for a walk/ bike ride with an adult.

Thursday

Spelling	Rainbow write your spelling words (write each word in different colours of the rainbow.)
Writing	 <p>The winner is Brisbane! Brisbane has won the right to host the 2032 Olympics. Australia has hosted the Olympics in Melbourne 1956 and Sydney 2000.</p> <p>Brisbane needs a mascot. Design, draw and describe a mascot for the Brisbane Olympics.</p> 

Reading	Read for 20 minutes.
Sentence of the Day	Complete the complex sentence <ul style="list-style-type: none"> • He didn't win the race although
Comprehension	Complete the second Book Emojis (attached at the back of the booklet)
Fast Maths	
Maths Problem Solving	There are 32 students in 4K. Mrs Khalil wants to split to class into even groups. How many different even groups can she make? How many even groups could Mrs Khalil make if 2 students are away?
Maths:	<p>Tessellation: When shapes fit together to make a repeated pattern. Using 2D shapes, draw and colour your own tessellating pattern.</p>
Other	Complete the Olympic Sports Find-a-Word.

Friday

Spelling	Get someone to test you on your spelling words or do a look cover write check with them.
Reading	Read for 20 minutes
Sentence of the Day	Complete the complex sentence <ul style="list-style-type: none"> • The weather is cold today, so ...
Comprehension	<p>Can your Teacher Guess?</p> <p>Write a description (you could draw a picture to help) of your favourite character. The character can be from a book, movie or TV show. Post it on Seesaw and see if we can guess the character.</p>

Fast Maths	
Maths Problem Solving	<p>Macy uses $\frac{1}{4}$ of a tube of glue for each birthday card she makes. What is the greatest number of birthday cards she can make with 2 tubes of glue?</p>
Other	<p>Create a class poster for your class friends at school</p> <p>or</p> <p>Have a 'End of Term School Disco'</p> <p>Create a dance with our Extravaganza (Theme Music will be posted on Seesaw).</p> <p>Have a safe and great Holiday! Hope to see you next term.</p>

Olympic Sports



Find the following words in the puzzle.
 Words are hidden \uparrow \downarrow \rightarrow \leftarrow and \swarrow .






ATHLETICS
 BASEBALL
 BMX
 CANOEING
 CYCLING
 DIVING
 EQUESTRIAN

FENCING
 FOOTBALL
 GOLF
 JUDO
 KARATE
 ROWING
 SOFTBALL

SWIMMING
 TENNIS
 TRIATHLON
 WRESTLING

Rosemeadow Public School

X C E W K P D D B C E Z B I X B H Q M D P V V
T E U W Z D U Z J N R Y Q B P V C U T T V I B
Y Z H W S K N G N T O A L U C V U H P T X G H
Z S D R A W D E N N U D L M M X O E M U H L M
B N E S E I D C Q Y S H D A O V N O K G Q W U
Y L I L H A K A I H E L S C A N A M E L O C S
P V N O O F T M N U L H A A H U R J P W U U F
R A A T E W N P A S L Q X R U R Z C R Q T S X
E D C G B F O B T S W W I T G E B O R C V F O
S A R F D V V E P I Y Q D H C L X X G H X Y K
S B I P D N A L R A F C M U A J F R J W T R D
O B I A W R P L E N R D J R G M S T U Y C O S
T A P O I Q O X A T H Z W D H V P S V S U L Q
T L M H D T G U T A N I N Q P H Q A C N E Y K
O N K H V G Z K E T K O A Z R O S E N C B A S
R S C L C U J J H N K H K D G K F K H U O T N


Find the following words in the puzzle.
Words are hidden     and .

CAMPBELL
COLEMAN
DAY
EDWARDS
HUME
HUSSIAN

KAHLIL
KEAST
LABBAD
MACARTHUR
MCFARLAND
PRESSOTTO

ROSE
ROUSELL
RUSE
TAYLOR

Your Home Learning Design



Book Emojis

Can you guess then title of the book by looking at the emojis?

